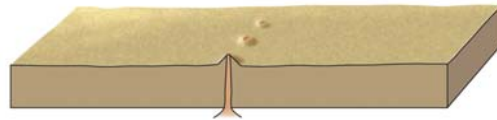
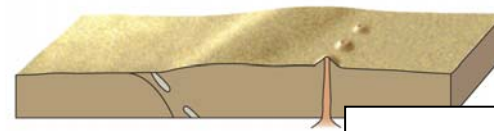


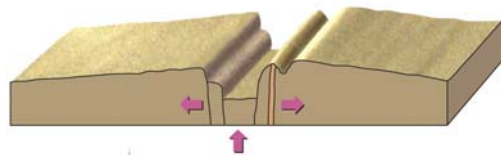
Name: _____

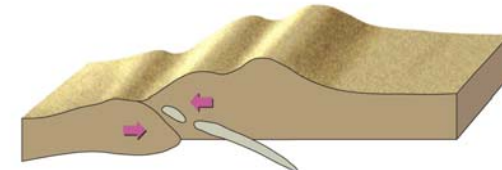
Klasse: _____


The Wilson Cycle

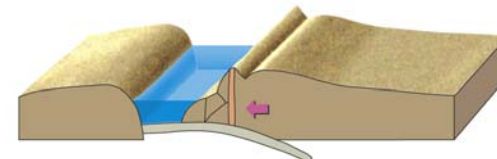


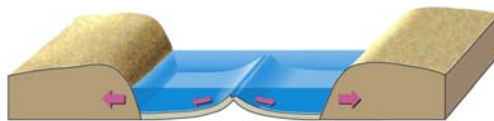


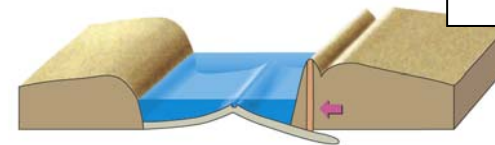












Which are the stages of the Wilson Cycle? Insert the following terms into the graphic.

(Atlantic Ocean, converging (closing), diverging (opening), Himalayan Mountains, Mediterranean Sea, Pacific Ocean, Peneplained Mountain, Stable Craton, Red Sea, Rift Valley)